



SAFETY WEEK 4

A Week of Fun Activities!

Daily activity helps build healthy bodies and minds!

Check off each activity and bring the checklist to the Bike Repair Event on October 3 for a free goody bag. See how many you can do. One item for each week of activities turned in.

Monday

Walk/Bike
Challenge:
*Find the
Shortest Route*

Tuesday

Walk/Bike
Challenge:
Word Find

Wednesday


Walk/Bike
Challenge:
I Spy

Thursday

Walk/Bike
Challenge: #4
*Route to
School Map*

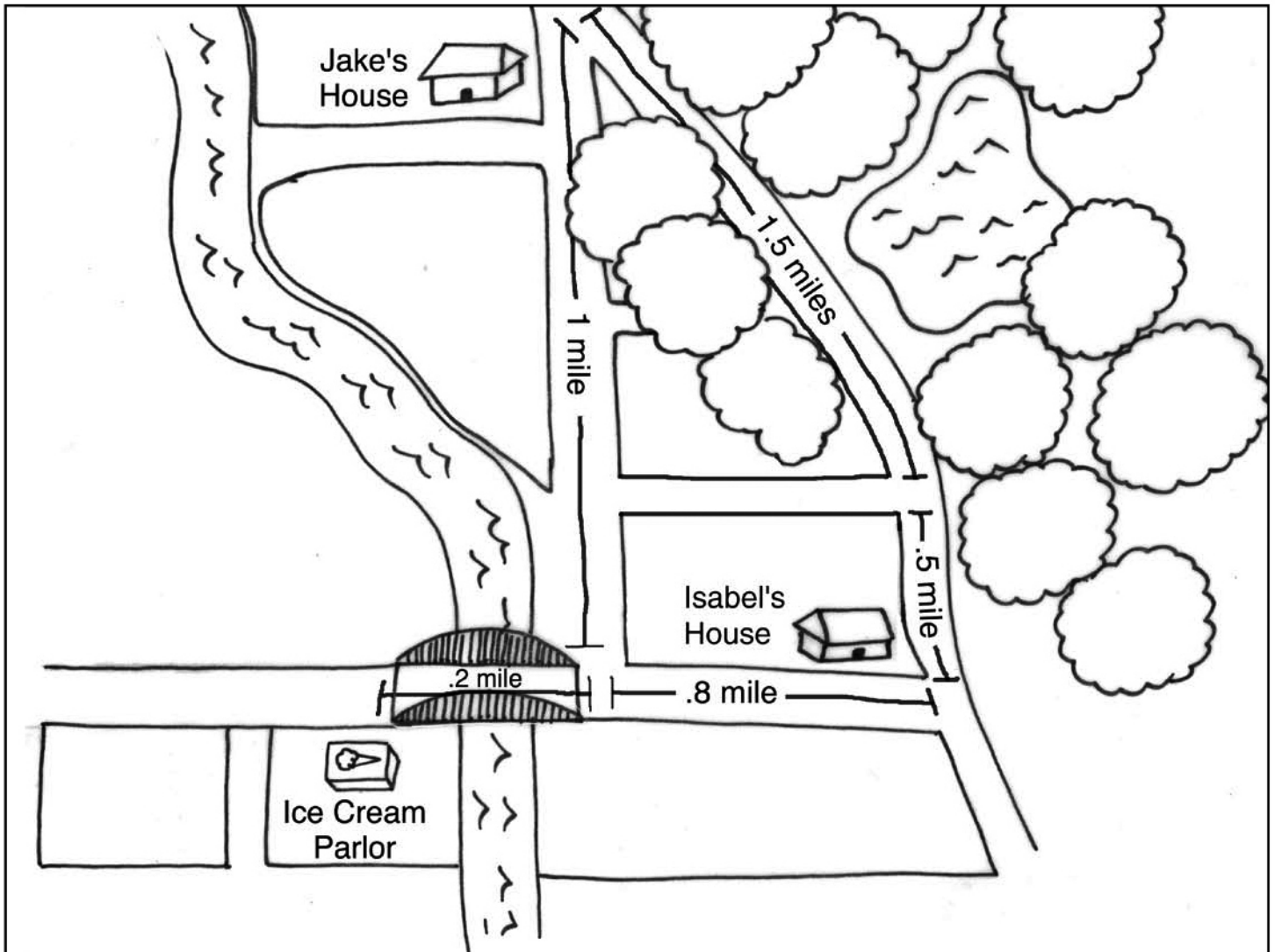
Friday

Walk/Bike
Challenge #4
*Map your Route
to School*



Walk/Bike Challenge

Find the shortest route to the Ice Cream Parlour.



Jake and his parents are going to ride their bikes to get ice cream.

How far is Jake's house from Isabel's house if they take the route through the park _____

How far is Jake's house from the ice cream parlour if they take the route by the river _____

How far is Isabel's house from the ice cream parlour _____

Which is the shortest route to the ice cream parlour if Jake and his parents must stop to get Isabel first _____



Walk/Bike Challenge Word Find

Find each word listed on the left, then circle it when you find it.



BICYCLE	N	T	I	Q	N	S	L	Y	A	L
SAFETY	A	O	B	C	R	I	D	T	F	I
HELMET	M	H	I	N	D	G	O	E	R	S
SIGNS	F	T	C	T	X	N	U	F	I	K
FUN	E	A	Y	T	C	S	H	A	E	L
FRIENDS	R	P	C	R	A	E	M	S	N	Z
CAUTION	Y	A	L	A	L	K	T	C	D	S
PATH	D	R	E	M	O	Y	C	O	S	M
PROTECTION	S	P	E	S	N	A	V	T	R	E
SMART	Y	T	C	A	U	T	I	O	N	P




Walk/Bike Challenge

I Spy - How many animals can you find on your next walk or bike ride?



Directions: Count how many of each animal you see on a walk. Write the answers in the box provided below.



Cats

Dogs



Walk/Bike Challenge #4

Walk or bike to your school. Can you draw a map to get there?



A large, empty rectangular box with a black border, intended for drawing a map to get to school.



www.WalkMoreBikeMore.org